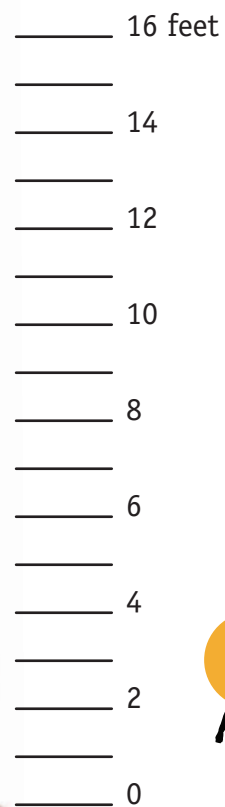




# Measuring with the Big Boy



Let's do some measuring and see how your measurements compare to the Big Boy. Using a ruler measure the people and objects shown below. Write your answers in the spaces provided.



**Big Boy is about 16 feet tall.**



How tall is your brother or sister? \_\_\_\_\_ feet \_\_\_\_\_ inches

How tall is your dad? \_\_\_\_\_ feet \_\_\_\_\_ inches

How tall is your mom? \_\_\_\_\_ feet \_\_\_\_\_ inches

How tall are you? \_\_\_\_\_ feet \_\_\_\_\_ inches

Who is taller: Big Boy or your brother or sister?

Big Boy or your dad? Big Boy or your mom? Big Boy or you?

**Big Boy is about 133 feet long.**

How long is your family car? \_\_\_\_\_ feet \_\_\_\_\_ inches

Which is longer: Big Boy or your family car?

